



INDIAN SCHOOL AL WADI AL KABIR
DEPARTMENT OF MATHEMATICS (2021 – 2022)


TOPIC: ADDITION

RESOURCE PERSON: MRS. VEDA VIJAY

WORKSHEET -1


NAME: _____ **CLASS: II SEC:** _____ **DATE:** _____

I. Draw lines to match the pictorial addition to the correct addition sentence and sum (one question is done for you).



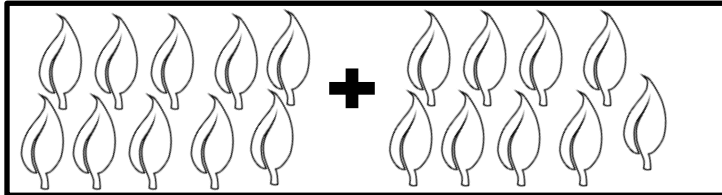
$$8 + 4$$

$$= 11$$




$$6 + 5$$

$$= 12$$



$$5 + 8$$

$$= 19$$



$$10 + 9$$

$$= 13$$

II. Add the following horizontally.

a. $56 + 3 =$ _____

d. $72 + 5 =$ _____

b. $69 + 6 =$ _____

e. $25 + 8 =$ _____

c. $88 + 2 =$ _____

f. $33 + 7 =$ _____

III. Solve the following sums. The monkeys will return the kites to the boy only if they are answered correctly.

T	O
	6
	2
+	1
=	

T	O
2	4
+	4
=	

T	O
4	2
+	5
=	

T	O
7	3
+	3
=	

T	O
9	2
+	6
=	

I want my kites back.
Please help me to do
the addition sums
correctly.





INDIAN SCHOOL AL WADI AL KABIR
DEPARTMENT OF MATHEMATICS (2021 – 2022)

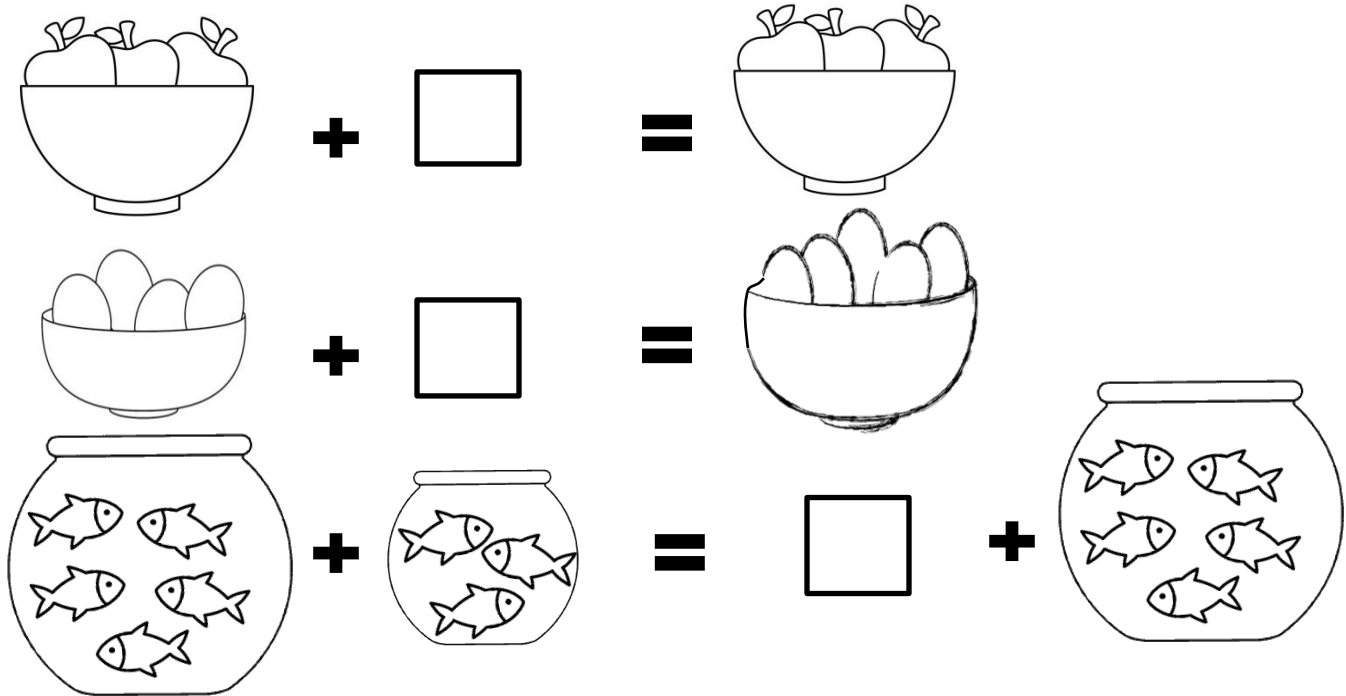
TOPIC: ADDITION

RESOURCE PERSON: MRS. VEDA VIJAY

WORKSHEET -2

NAME: _____ **CLASS: II SEC:** _____ **DATE:** _____

I. Observe the pictures carefully and fill in the blanks using the properties of addition.



II. Match the following.

1.	$79 + 1$	a.	79
2.	$79 + 0$	b.	$3 + 79$
3.	$79 + 3 =$	c.	Eighteen
4.	$17 + 1$	d.	Eighty
1. _____, 2. _____, 3. _____, 4. _____			

III. Find the sum of the following numbers.

a.

T	O
5	4
2	2

+ =

b.

T	O
3	3
1	6

+ =

c.

T	O
2	3
4	5

+ =

d.

T	O
2	3
1	5
1	1

+ =

e.

T	O
3	2
5	3
1	2


+ =

f.

T	O
4	1
3	5
2	3

+ =

IV. Find the sum of the numbers given in both caterpillars and colour the caterpillar with the greater answer.





INDIAN SCHOOL AL WADI AL KABIR
DEPARTMENT OF MATHEMATICS (2021 – 2022)

TOPIC: ADDITION

RESOURCE PERSON: MRS. VEDA VIJAY

WORKSHEET -3

NAME: _____ **CLASS: II** **SEC:** _____ **DATE:** _____

I. Add the following sums by regrouping to break the code and solve the riddle. Write the corresponding letters below the sum when you get the numbers provided in the box as the answer.

What disappears as soon as you say it's name?

63	71	53	37	84	75
E	I	S	C	N	L

T	O	T	O	T	O	T	O	T	O	T	O	T	O							
2	5	3	7	5	8	4	9	5	9	1	9	4	6							
+	2	8	+	3	4	+	1	7	+	1	4	+	2	5	+	1	8	+	1	7
=			=			=			=			=			=			=		



INDIAN SCHOOL AL WADI AL KABIR
DEPARTMENT OF MATHEMATICS (2021 – 2022)

TOPIC: ADDITION

RESOURCE PERSON: MRS. VEDA VIJAY

CHAPTER CHECK UP WORKSHEET

NAME: _____ **CLASS: II SEC:** _____ **DATE:** _____

I. Fill in the blanks.

- a. The sum of 29 and 4 is equal to _____.
- b. If we add 5 to 30, we will get _____.
- c. 2 more than 40 is _____.
- d. 33 and 6 together gives _____.
- e. 26 plus 5 is equal to _____.
- f. 1 more than 29 is _____.
- g. When we add zero with any number we get the _____ as the answer.
- h. $54 + 7$ is same as $7 +$ _____.
- i. 6 and 10 altogether is _____.
- j. Adding 1 to any number gives the _____ as the answer.
- k. 10 more than 60 is _____.
- l. By adding 9 and 5 we will get _____.

II. Find the sum of the following numbers.

a.	T	O
	3	2
	4	5
<input type="text"/>		

b.	T	O
	6	7
	1	3
<input type="text"/>		

c.	T	O
		2
		4
		3
<input type="text"/>		

d.	T	O
	1	3
	1	0
	4	4
<input type="text"/>		

III. Word problems.

a. There are 43 hens and 25 chicks in a farm. How many birds are there in all?

T O

	<input type="text"/>
	=

Ans:

b. There are 38 long pencils and 14 short pencils in a box. How many pencils are in altogether?

T O

	<input type="text"/>
	=

Ans: