



**INDIAN SCHOOL AL WADI AL KABIR**  
**DEPARTMENT OF SOCIAL SCIENCE**  
**REVISION WORKSHEET-2021-22**

**CLASS: VI**

<b>HISTORY</b>	
<b>I</b>	<b>Choose the correct answer :-</b>
1	The language that was not used in the old books. a) Hindi    b) Tamil    c) Urdu    d) English
2	The earliest people were skilled gatherers as they gathered their _____. a) Wood    b) Food    c) Bamboo    d) Books
3	Grasslands were developed around _____ years ago. a) 12000    b) 10000    c) 13000    d) 15000
<b>II</b>	<b>Fill in the blanks :-</b>
4	_____ are written on hard surfaces. a) Homework    b) Inscriptions    c) Manuscripts    d) Biography
5	The _____ did not keep records of what they did whereas the kings kept records of their achievements. a) Hunters    b) Farmers    c) Gatherers    d) Traders
6	_____ was brought from present-day Rajasthan, and also from Oman. a) Copper    b) Gold    c) Bronze    d) Aluminium
<b>III</b>	<b>State True or False: -</b>
7	In Hunsgi, tools were made of copper.
8	Factory are the places where the remains were found.
<b>IV</b>	<b>Match the following: -</b>
<b>A</b>	<b>B</b>
9 Wheel	i) Writing
10 Scribes	ii) Plough
	iii) Spinning
<b>CIVICS</b>	
<b>V</b>	<b>Choose the correct option :-</b>
11	_____ is a rule, by the people. a) Participation    b) Democracy    c) Constitution    d) Government
12	American women got the right to vote in _____. a) 1922    b) 1920    c) 1930    d) 1990
<b>VI</b>	<b>Fill in the blanks :-</b>
13	Our _____ believes in respect to all human beings. a) Government    b) Democracy    c) Constitution    d) Diversity
14	_____ teaches us to live and adjust ourselves in a broad society. a) Diversity    b) Culture    c) Region    d) Happiness

<b>VII</b>	<b>Match the following: -</b>
<b>A</b>	<b>B</b>
15 India	a. Soweto
16 African National Congress	b. Secular State
	c. Dr Nelson Mandela

**GEOGRAPHY**

**VIII Fill in the blanks :-**

17 The \_\_\_\_\_ indicates the north direction.  
a) Saptarishi    b) Pole Star    c) Ursa Major    d) Planets




18 \_\_\_\_\_ are lit by the light of the stars.  
a) Sun    b) Planets    c) Constellation    d) Orbit

**IX State True or False: -**

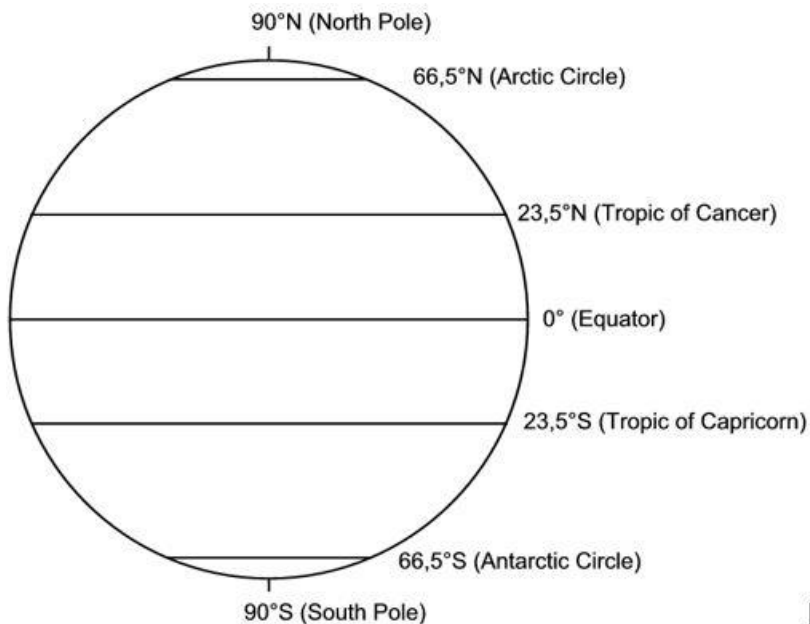
19 Days are longer during winter.

20 The daily motion of the earth is circular.

**X Match the following: -**

21.  a. Chhatri
22.  b. Broad gauge railway line
23.  c. Church  
d. Settlement

**XI Observe the diagram and answer the questions: -**



24. Which latitude divides the earth into two hemispheres?  
(a)Tropic of Cancer (b) Tropic of Capricorn (c) Equator (d)Prime Meridian

25. Tropic of Capricorn lies in the southern Hemisphere.

(a) True (b) False

26. The temperate zone lies between Antarctic Circle and South Pole.

(a) True (b) False

**XII** On the given outline map of India, identify the states marked and answer the questions below.



27. Identify the state marked as 'A'

(a) Punjab (b) Kerala (c) Tamil Nadu (d) None of these

28. Identify the state marked as 'B'

(a) Karnataka (b) Assam (c) Madhya Pradesh (d) Sikkim

29. Identify the state marked as 'C'

(a) Gujarat (b) Kerala (c) Andhra Pradesh (d) West Bengal

30. Identify the state marked as 'D'

(a) Punjab (b) Rajasthan (c) Meghalaya (d) None of these

31. Identify the state marked as 'E'

(a) Uttar Pradesh (b) Jharkhand (c) Tamil Nadu (d) None of these