


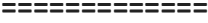







# INDIAN SCHOOL AL WADI AL KABIR

<b>Class: VI</b>	<b>Department: SOCIAL SCIENCE</b>	
<b>Worksheet No: 10</b>	<b>Topic: Maps</b>	<b>Year:2021-22</b>

<b>I</b>	<b>Fill in the blanks:-</b>
1	Which one of the Following is not a component of map? (a) Direction (b) <b>Globe</b> (c) Symbol (d) Distance
2	_____ show natural features of the earth such as mountains, plateaus, plains, rivers, oceans, etc. (a) <b>Physical maps</b> (b) Political maps (c) Thematic maps (d) None of these
3	_____ is a collection of Maps. (a) Plan (b) Sketch (c) <b>Atlas</b> (d) Scale
4	The arrow which shows the north direction on a map is called the _____. (a) South Line (b) East Line (c) West Line (d) <b>North Line</b>
<b>II</b>	<b>State True or False:-</b>
1	A globe is used to study the Earth as a whole- <b>True</b>
2	Political maps show natural features of the earth - <b>False</b>
3	There are four intermediate directions - <b>True</b>
4	A large scale map is used to show large areas like countries on a paper - <b>False</b>
<b>III</b>	<b>Match the following: -</b>
1	<b>PO</b> (a) Unmetalled road
2	 (b) Settlement
3	 (c) Post office
4	 (d) Broad gauge railway line
5	 (e) Church
6	 (f) River
7	 (g) Well
8	 (h) International boundary (i) Chhatri
	<b>1 - c    2 - b    3 - f    4 - g    5 - a    6 - d    7 - h    8 - i</b>
<b>IV</b>	<b>Answer the following questions in one sentence:-</b>
1	What do political Maps show? ❖ <b>Political maps show cities, towns and villages and different countries and state of the world with their boundaries.</b>
2	What is a sketch map? ❖ <b>A sketch map is a rough drawing of an area which is drawn without scale.</b>
3	What is a plan? ❖ <b>A plan is a drawing of a small area on a large scale.</b>

4	<p>What are conventional symbols?</p> <ul style="list-style-type: none"> <li>❖ Some symbols have a fixed meaning and are understood uniformly throughout the world. Such symbols are known as conventional symbols.</li> </ul>
V	<p>Answer in brief :-</p>
1	<p>Write a note on 'Compass'.</p> <ul style="list-style-type: none"> <li>❖ The direction of a place is traced out with the help of a compass.</li> <li>❖ It is an instrument used to find out main directions.</li> <li>❖ Its magnetic needle always points towards north-south direction.</li> </ul>
2	<p>Discuss symbols as a major component of a map.</p> <ul style="list-style-type: none"> <li>❖ Drawing different features such as buildings, roads, etc. in their actual shape and size on a map is perhaps not possible.</li> <li>❖ It is therefore, they are shown by using certain letters, shades, colours, pictures and lines.</li> <li>❖ These are symbols that give a lot of information in a limited space.</li> <li>❖ With the use of these symbols, maps can be drawn easily and are simple to read.</li> <li>❖ These symbols help us greatly in a situation when we don't know the language of an area and therefore cannot ask someone for directions.</li> </ul>
3	<p>What colours are used for the following:</p> <ul style="list-style-type: none"> <li>(i) Mountains - Brown</li> <li>(ii) Plains - Green</li> <li>(iii) Plateaus - Yellow</li> <li>(iv) Water bodies - Blue</li> </ul>
4	<p>Draw Cardinal points and Intermediate directions.</p> <div style="text-align: center;"> </div>