


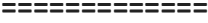







INDIAN SCHOOL AL WADI AL KABIR

Class: VI	Department: SOCIAL SCIENCE	
Worksheet No: 10	Topic: Maps	Year:2021-22

I	Fill in the blanks:-
1	Which one of the Following is not a component of map? (a) Direction (b) Globe (c) Symbol (d) Distance
2	_____ show natural features of the earth such as mountains, plateaus, plains, rivers, oceans, etc. (a) Physical maps (b) Political maps (c) Thematic maps (d) None of these
3	_____ is a collection of Maps. (a) Plan (b) Sketch (c) Atlas (d) Scale
4	The arrow which shows the north direction on a map is called as the _____. (a) South Line (b) East Line (c) West Line (d) North Line
II	State True or False:-
1	A globe is used to study the Earth as a whole.
2	Political maps show the natural features of the earth.
3	There are four intermediate directions.
4	A large scale map is used to show large areas like countries on a paper.
III	Match the following: -
1	PO (a) Unmetalled road
2	 (b) Settlement
3	 (c) Post office
4	 (d) Broad gauge railway line
5	 (e) Church
6	 (f) River
7	 (g) Well
8	 (h) International boundary (i) Chhatri
	1 - __ 2 - __ 3 - __ 4 - __ 5 - __ 6 - __ 7 - __ 8 - __
IV	Answer the following questions in one sentence:-
1	What do political Maps shows?
2	What is a sketch map?
3	What is a plan?
4	What are conventional symbols?
V	Answer in brief :-

1	Write a note on 'Compass'.
2	Discuss symbols as a major component of a map.
3	What colours are used for the following: (i) Mountains - (ii) Plains - (iii) Plateaus - (iv) Water bodies -
4	Draw Cardinal points and Intermediate directions.