







# INDIAN SCHOOL AL WADI AL KABIR

<b>Class: VI</b>	<b>Department: SOCIAL SCIENCE</b>	
<b>Worksheet No: 4</b>	<b>Topic: On The Trail Of The Earliest People</b>	<b>Year:2021-22</b>

<b>I</b>	<b>Fill in the blanks:-</b>
1	Hunter-gatherers lived around _____ years ago. (a) One million      (b) Two million      (c) Three million      (d) Five million
2	_____ discovered some of the things made and used by the hunter-gatherers. (a) Historian      (b) Painters      (c) None of these      (d) Archaeologists
3	The Paleolithic Age was followed by the _____ Age. (a) Mesolithic      (b) Neolithic      (c) Microliths      (d) None of these
4	_____ are defined as the places where the remains were found. (a) Factory      (b) Breeding      (c) Sites      (d) Techniques
<b>II</b>	<b>State True or False:-</b>
1	Some rivers are perennial while others are seasonal.
2	Tools of wood have survived better than tools of stone.
3	The sites where hunter-gatherers lived were close to water.
4	Man led a well-settled life during the Paleolithic Age.
<b>III</b>	<b>Match the following: -</b>
1	Bhimbetka      (a) Andhra Pradesh
2	Hunsgi      (b) Madhya Pradesh
3	Kurnool      (c) Karnataka
	1 - ____      2 - ____      3 - ____
<b>IV</b>	<b>Answer the following questions in one sentence:-</b>
1	What were factory sites?
2	What do people need while hunting animals or catching fish and birds?
3	Name any two grain bearing grasses.
<b>V</b>	<b>Answer in brief :-</b>
1	<b>Write short notes on the following: -</b> a) Stone on stone technique b) Pressure flaking
2	What was the impact of the change in the environment about 12,000 years ago?

**VI** **Picture Based Question.**

1 Match the following stone tools to the period they were made given below.



- i. These are natural pebbles.
- ii. These were made later still.
- iii. These are examples of the earliest stone tools.
- iv. These were made about 10,000 years ago.
- v. These were made several thousand years later.