



INDIAN SCHOOL AL WADI AL KABIR
DEPARTMENT OF SOCIAL SCIENCE
REVISION WORKSHEET 2020-21
CLASS VI

HISTORY	
I	Choose the correct answer: -
1	Which was the capital city of the Pallavas? (a) Kanchipuram (b) Delhi (c) Agra (d) Lucknow.
2	People in forested regions provided the Mauryan officials with _____ (a) Elephants (b) Timber (c) Honey and Wax (d) All of these.
3	Ashoka appointed officials called _____ to go from place to place and tell people about 'dhamma'. (a) Royal Family Members (b) Dhamma Mahamatta (c) Spies (d) Governors.
II	Fill in the Blanks: -
4	Royal princes often went to the provinces as _____. (a) Governors (b) Labour (c) Both A & B (d) All of the above.
5	In the Tamil region, large landowners were known as _____ (a) Uzhavar (b) Adimai (c) Both a and b (d) Vellalar.
6	The ancient name of coastal Orissa: (a) Magadha (b) Ujjain (c) Kalinga (d) All of these.
III	State True or False
7	Ujjain was the gateway to the north-west.
8	Abhijnana Shakuntalam is the story of the love between a king named Dushyanta and a young woman named Shakuntala.
9	Most Ashokan inscriptions are in the Brahmi script.
IV	Match the following: -
10	Aihole a. A very big kingdom
11	Pulakeshin II b. Comprehensible to all.
12	Prakrit c. Ravi Kriti composed prashasti on
	d. Important trading center
	Answers: - 10. _____ 11. _____ 12. _____
V	Read the sources given below and answer the following questions: -
	Source-A: Introduction We can use other kinds of evidence to find out about life in some of these early cities. Sculptors carved scenes depicting peoples' lives in towns and villages, as well as in the forest. Many of these sculptures were used to decorate railings, pillars and gateways of buildings that were visited by people. Source-B: Finding out about cities

In many cities, archaeologists have found rows of pots, or ceramic rings arranged one on top of the other. These are known as ring wells. These ring wells are usually found in individual houses.

Source-C: People who lived in the Southern villages

There were at least three different kinds of people living in most villages in the southern and northern parts of the subcontinent. In the Tamil region, large landowners were known as Vellalar, ordinary ploughmen were known as Uzhavar.

Source-A: Introduction

1. Cities were surrounded by massive fortification walls. (State true or False)

- (a) True (b) False

Source-B: Finding out about cities

2. People used ring wells as _____ and also as drains and garbage.

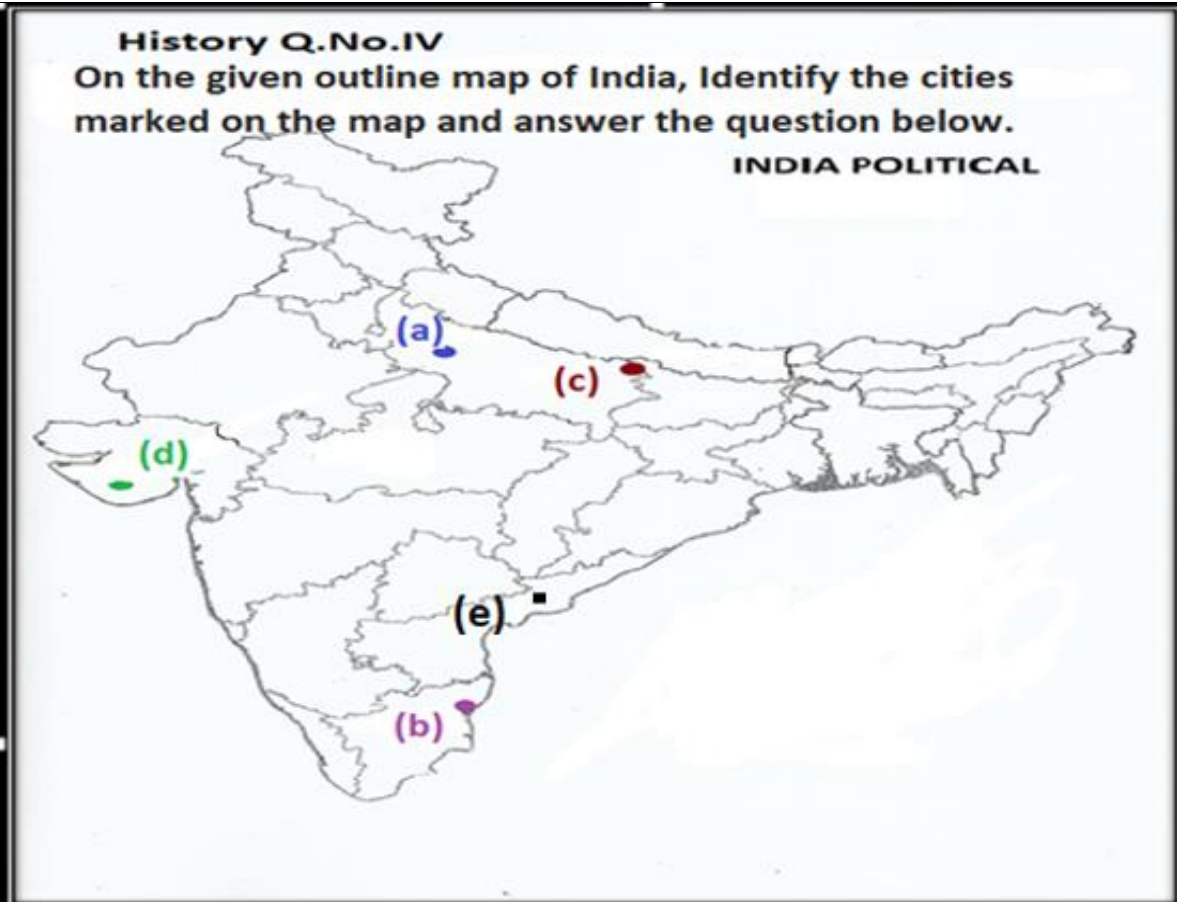
- (a) Courtyard (b) Storehouse (c) Toilets (d) None of these

Source-C: People who lived in the Southern villages

3. Who were known as Kadaiyar?



- (a) Slaves (b) Landless labourers (c) Adimai (d) All of them

VI On the given outline map of India, identify and name the following cities of Gupta Empire.

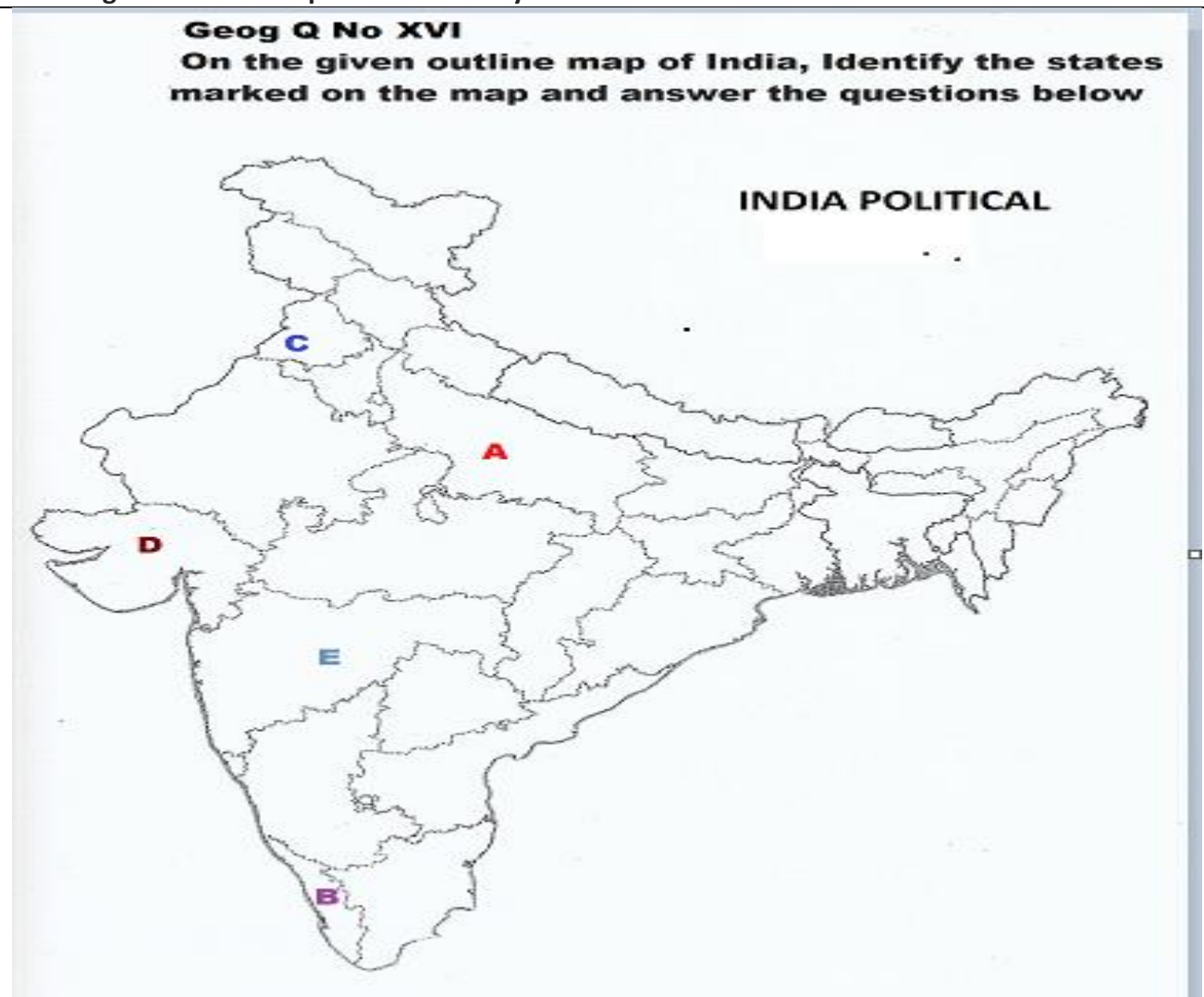


1	Identify the city marked as “a” (a) Madurai (b) Vallabhi (c) Ujjain (d) Kannauj	
2	Identify the city marked as “b” (a) Madurai (b) Pataliputra (c) Vallabhi (d) Amaravati	
3	Identify the city marked as “c” (a) Madurai (b) Pataliputra (c)) Amaravati (d) Ujjain	
4	Identify the city marked as “d” (a) Pataliputra (b) Ujjain (c) Vallabhi (d) Madurai	
5	Identify the city marked as “e” (a) Madurai (b) Ujjain (c) Amaravati (d) Kannauj	
Civics		
VII	Choose the correct answer: -	
1	The Gram Sabha is the most important body of the _____ Raj System. (a) Taluka (b) District (c) Panchayati (d) Block	
2	Who supervises the work of the Patwari? (a) The People (b) The Tehsildar (c) The Block Development Officer (d) All of these.	
3	Another name of Janpad Panchayat. (a) The Panchayat Samiti (b) The Zila Parishad (c) Development authority (d) All of these.	
VIII	Fill in the Blanks: -	
4	The people of _____ village are facing the problem of Water shortage. (a) Hardas. (b) Majuli (c) Malana (d) Mandawa.	
5	The _____ department ensures that farmers can easily obtain a copy of their land record. (a) Revenue (b) Police (c) Agriculture (d) Panchayat.	
6	The Hindu Succession Amendment Act 2005 benefits _____ of Hindu family. (a) Women (b) Mothers (c) Daughters (d) All of these.	
IX	State True or False: -	
7	Gram Sabha consists of all the adults of a village.	
8	A girl should be treated equally in society and be given the same right as a male child is given.	
9	Yasmin Khala was a retired teacher.	
X	Match the Following: -	
10	Tax is collected	a. elected members
11	Bund.	b. Khasra Record.
12	Ward Councillors	c. on property, water and other services
		d. Separation of Land.
Answers: - 10. _____ 11. _____ 12. _____		
XI	Read the sources given below and answer the following questions: -	
	Source A: Introduction	

	<p>The Municipal Corporation runs schools, hospitals and dispensaries. And makes gardens and maintains them.</p> <p>Source B: The Ward Councillor</p> <p>When the problems are within a ward then the people who live in the ward can contact their councillors. For example, if there are dangerous electrical wires hanging down then the local Councillor can help them get in touch with the electricity authority.</p> <p>Source C: The Municipal Committees</p> <p>All the Ward Councillors meet and they make a budget and the money is spent according to this. The Ward Councillors try and ensure that the particular demands of their ward are placed before the entire council.</p> <p>Source A: Introduction</p> <p>1. _____ is a governing body in big cities. (a) Municipal Corporation (b) Village Panchayat (c) Municipal Council (d) None of these.</p> <p>Source B: The Ward Councillor</p> <p>2. Gangabai and other women of her locality were very happy to find garbage lying all over the street and spreading foul smell. (State true or False) (a) True (b) False</p> <p>Source C: The Municipal Committees</p> <p>3. Who are in charge of implementing the decisions of the Municipal Corporation? (a) The Commissioner (b) The Accounts Officer (c) The Sanitation Engineer (d) All of these.</p>
	Geography
XII	Choose the correct answer: -
1	Which is the busiest ocean from the point of view of commerce? (a) Indian Ocean (b) Pacific Ocean (c) Atlantic Ocean (d) Arctic Ocean.
2	Where is Sundarban located? (a) Goa (b) West Bengal (c) Orissa (d) Madhya Pradesh.
3	Which island groups were affected by the Tsunami in 2004? (a) Lakshadweep (b) Maldives (c) Andaman and Nicobar (d) Both (a) and (c).
XIII	Fill in the Blanks: -
4	The Great Indian Desert lies to the part of India. (a) Eastern (b) Western (c) Southern (d) Central.
5	Tropical Rain Forest are found in the areas which receive rainfall. (a) Heavy (b) Scanty (c) Low (d) Moderate.
6	The _____ is the solid portion of the earth. (a) Atmosphere (b) Hydrosphere (c) Lithosphere (d) Biosphere.
XIV	State True or False: -

7	Air moves from high pressure to low pressure.
8	The range is a line of mountains.
9	Canada has five time zones.
XV	Match the Following: -
10	River a =====
11	Tank b 
12	Road Unmetalled c 
	d PS
	Answers: - 10. ____ 11. ____ 12. ____

XVI On the given outline map of India identify the marked states.



1	Identify the state marked as 'A'. (a) Uttar Pradesh (b) Kerala (c) Goa (d) Punjab
2	Identify the state marked as 'B'. (a) Odisha (b) Bihar (c) Uttar Pradesh (d) Kerala

3	Identify the state marked as 'C'. (a) Kerala (b) Punjab (c) Maharashtra (d) Rajasthan
4	Identify the state marked as 'D'. (a) Assam (b) Gujarat (c) Madhya Pradesh (d) Tamil Nadu
5	Identify the state marked as 'E'. (a) Punjab (b) Goa (c) Maharashtra (d) West Bengal
XVII	Read the sources given below and answer the following questions: -
	<p>Source-A: Introduction A plateau is an elevated flat land. It is a flat-topped table land standing above the surrounding area. A plateau may have one or more sides with steep slopes.</p> <p>Source-B: Plateaus Plateaus are very useful because they are rich in mineral deposits. As a result, many of the mining areas in the world are located in the plateau areas.</p> <p>Source-C: Waterfalls In the plateau areas, there may be several waterfalls as the river falls from a great height. The lava plateaus are rich in black soil that are fertile and good for cultivation.</p> <p>Source-A: Introduction 1. The Deccan Plateau is located in _____. (a) Kenya (b) Australia (c) India (d) Africa</p> <p>Source-B: Plateaus 2 Which is the world's highest plateau? (a) Deccan plateau (b) Tibet plateau (c) Chhotanagpur plateau (d) East African plateau.</p> <p>Source-C: Waterfalls 3. Many plateaus have scenic spots which attract tourist on large scale. (State true or false) (a) True (b) False</p>