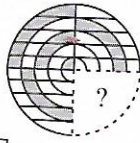


# LOGICAL REASONING

1. Select a figure from the options which when placed in the blank space of given figure would complete the pattern.



- A. B.   
 C. D.

2. If in each of the given numbers, 1 is added to the tens digit and 1 is subtracted from the unit digit, then which number will become the greatest?

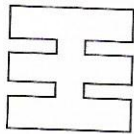
381 279 387 289 328

- A. 381 B. 279  
 C. 387 D. 328

3. If in a certain code language, 'BANGLE' is written as 'ABGNEL', then in the same code language 'CONGRATS' is written as \_\_\_\_\_.

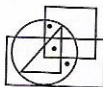
- A. TSRANGCO B. STARGNOC  
 C. OCGNARST D. OCGNRAST

4. A square paper is folded in a particular manner and a punch is made. When the paper is unfolded, it appears as shown in the given figure. Find the manner in which the paper is folded and punch is made.



- A. B.   
 C. D.

5. Select a figure from the options which satisfies the same condition of placement of the dots as in the given figure.



- A. B.   
 C. D.

6. Select the correct mirror image of the given figure.



- A. B.   
 C. D.

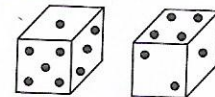
7. T is the son of P. S is the son of Q. T is married to R. R is daughter of Q. How is S related to T?

- A. Brother  
 B. Brother-in-law  
 C. Father  
 D. None of these

8. If is related to in some way, then in the same way is related to \_\_\_\_\_.

- A. B.   
 C. D.

9. Two positions of a dice are shown below. When there are two dots at the bottom, the number of dots on the top will be \_\_\_\_\_.



- A. 1 B. 3  
 C. 5 D. 6

10. Which of the following Venn diagrams best depicts the relationship amongst, 'Television, Newspaper and Paper'?

- A. B.   
 C. D.